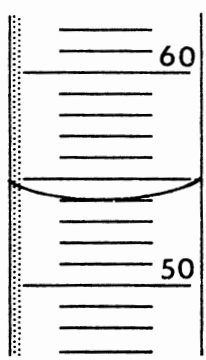


Name _____

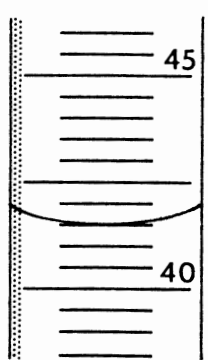
Date _____

Reading Graduated Cylinders

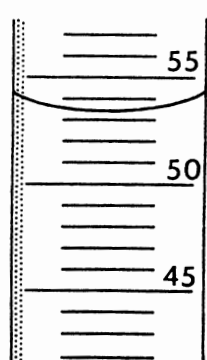
The calibrations on graduated cylinders vary widely. You must determine the precision on each one shown below. On each cylinder, the numbers represent milliliters.



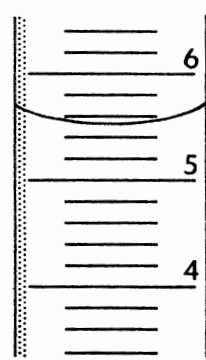
1. _____ ml



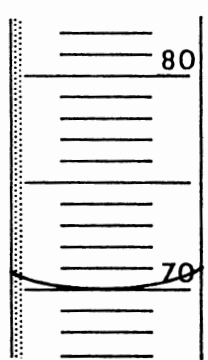
2. _____ l



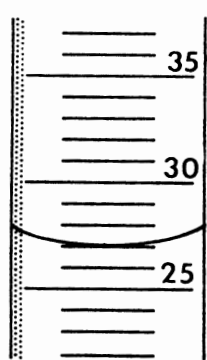
3. _____ ml



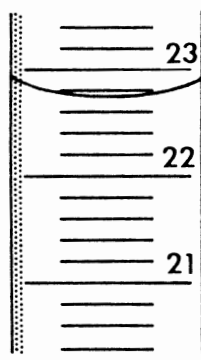
4. _____ ml



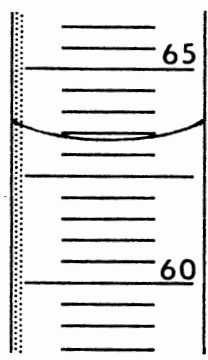
5. _____ ml



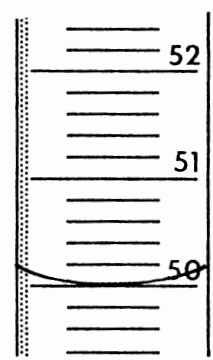
6. _____ l



7. _____ l



8. _____ ml



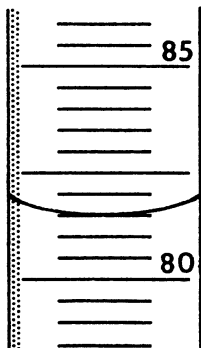
9. _____ ml

(continued)


Name _____

Date _____

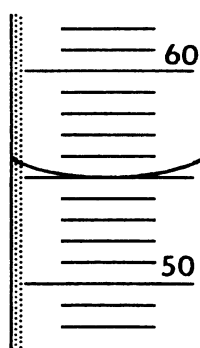
Reading Graduated Cylinders (*continued*)



10. _____ ml



11. _____ ml



12. _____ ml